





In these challenges, the number in each square is the average (mean) of the four numbers surrounding it.


Can you find the whole number that belongs in each square?






In these challenges, the number in each square is the average (mean) of the four numbers surrounding it.

Can you find the whole number that belongs in each square?



6



$$\begin{array}{r} 67 \\ 11 \\ 7 \\ \hline 86 \end{array}$$

$$\begin{array}{r} 676 \\ 4 \overline{) 256} \\ \underline{24} \\ 16 \end{array}$$