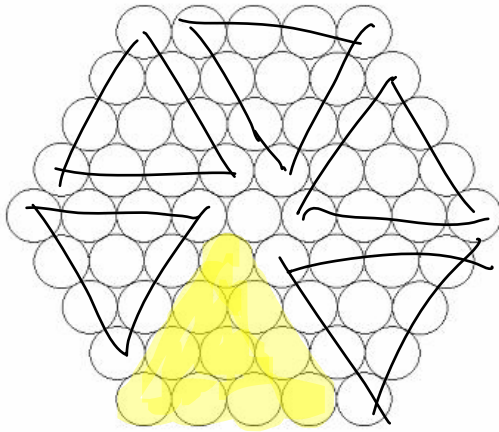
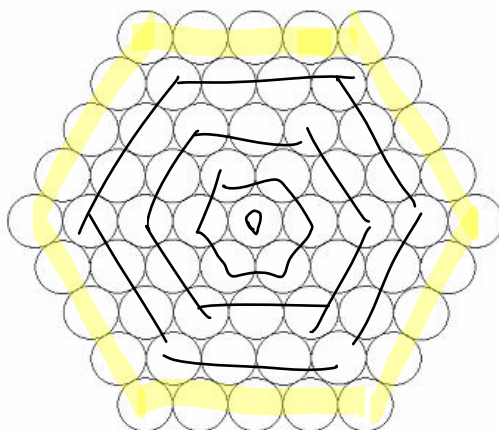
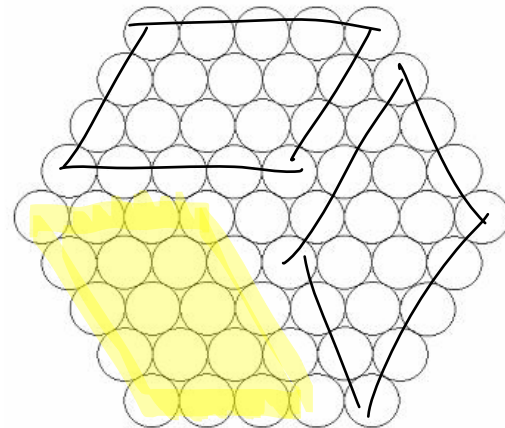


Christmas Chocolates



How many groups of tens can I eat if there are six sides? If I continue in the same pattern will get six but because of the shape of the triangle there will be one left over in the middle making 61.

There are 6 sides and I ate 20 chocolates. If I continued eating in the same pattern I will have room for 2 more 20s. There will be one left over in the middle making 61.



Four times six is 24 which is how much Matthew ate. The hexagon has 5 chocolates on each side but he would only count four. If Matthew ate the outside again it would be 18 because it would minus 1 on each side. Next it would be 12 then 6 then 1. When he adds all the numbers together it makes