












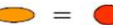





































Name:

<p>Each shape stands for one of these numbers:</p> <p>0 1 2 3 4 5 6 8 9 10 12</p> <p>With a partner, work out which number each shape represents and explain how you know.</p> <p>  ×  =   ×  =   ×  =   ×  =   ×  =   ×  =   ×  =   ×  =   ×  =   ×  =   ×  =   ×  =  </p> <ul style="list-style-type: none"> • Try starting with  and  • Cross off numbers as you work them out 	 = because...	 = because...
	 = because...	 = because...
	 = because...	 = because...
	 = because...	 = because...
	 = because...	 = because...
	 = because...	