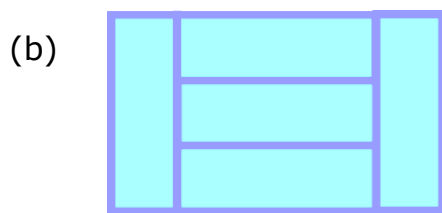
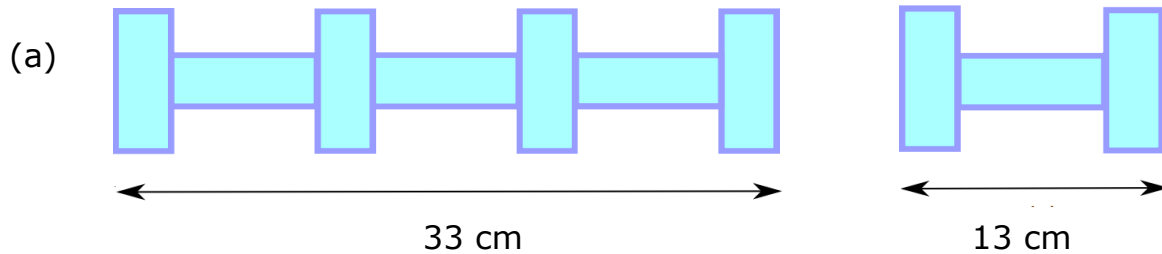
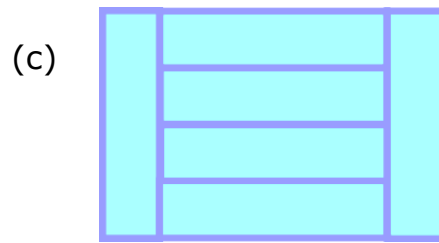



In each problem, work out the perimeter of one of the small rectangles:



Area of whole rectangle  
=  $60 \text{ cm}^2$



Area of whole rectangle  
=  $600 \text{ mm}^2$



Area of the  
whole rectangle  
=  $180 \text{ cm}^2$

Can you find the perimeter of this shape?

